


Name: _____

Score: ____ / 10 points

Key

GRADE 1 - FRACTIONS

1. Draw a line to show how you can split this paper equally so that you and a friend have the same amount of paper.




(____ / 2 points)

2. Circle one half of this group of stars.



(____ / 2 points)

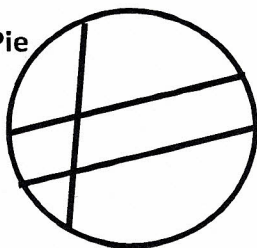
2. Draw lines to show where you would cut this rope to make two equal pieces.



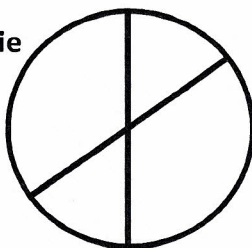
(____ / 2 points)

3. Circle the pie that is cut into equal sized pieces.

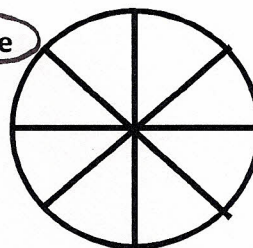
Apple Pie



Berry Pie




Cherry Pie



(____ / 2 points)

4. Draw lines in the rectangle to make 4 equal sized pieces. Shade in one fourth of the rectangle.



(____ / 2 points)