



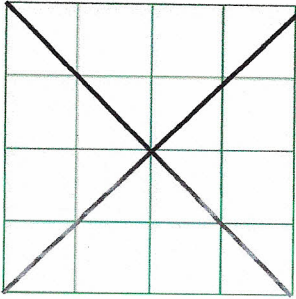
Name: _____

Score: ____ / 10 points

Key

GRADE 2 - FRACTIONS

1. Divide this square into fourths. One way has been done for you. Can you do it in two DIFFERENT ways?



Or others

(____/3 points)

2. Circle one half of this group of stars.



(____/2 points)

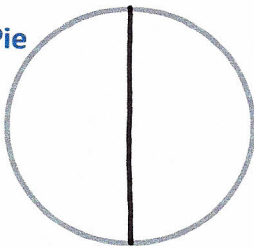
2. Draw lines to show where you would cut this rope to make three equal pieces.



(____/2 points)

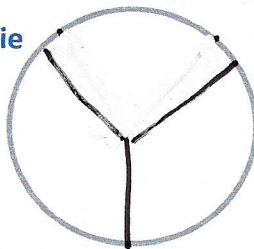
3. Draw lines to cut each pie into halves, thirds, or fourths.

Apple Pie



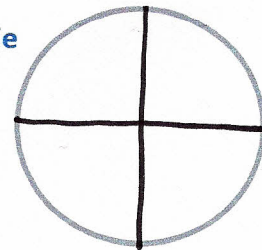
Cut into halves.

Berry Pie



Cut into thirds.


Cherry Pie



Cut into fourths.

(____/3 points)

4. How many fourths are in this rectangle? 4 Fourths



(____/2 points)