

Name: \_\_\_\_\_

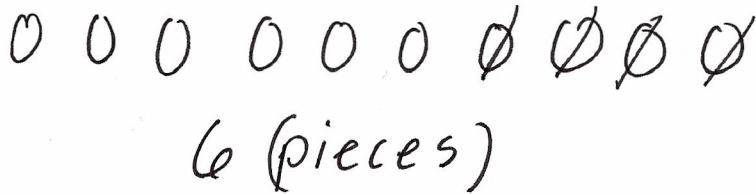
Score: \_\_\_\_ / 9 points

# Key

## KINDERGARTEN - ALGEBRAIC THINKING

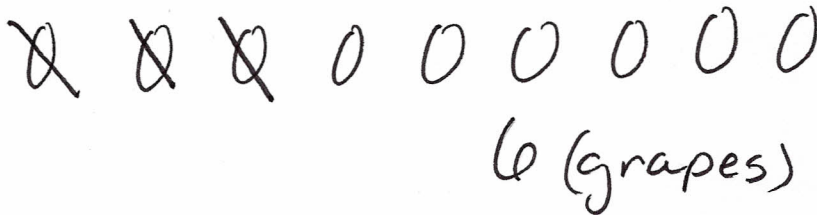
Use counters to solve the following problems. Show your answer with pictures and numbers.

1. Mason has 10 pieces of cereal. He eats 4 pieces. How many pieces does he have left?



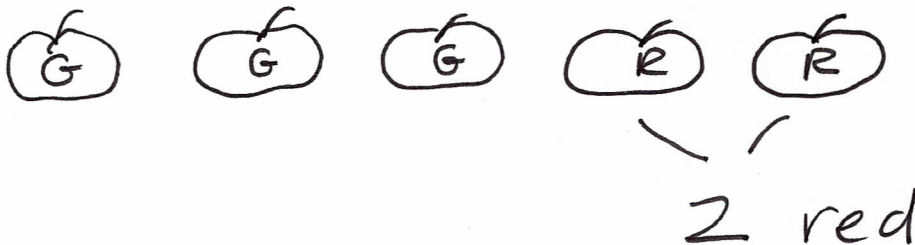
( \_\_\_\_ ) / 3 points

2. Nine grapes were in the bowl. I ate 3 grapes. How many grapes are in the bowl now?



( \_\_\_\_ ) / 3 points

3. Five apples are on the table. Three are green and the rest are red. How many red apples are there on the table?



( \_\_\_\_ ) / 3 points